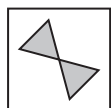



# Bond Fourth level papers in Non-verbal Reasoning 10–11+ years – Sample test



Which shape or pattern completes the larger square? Circle the letter.

**Example**



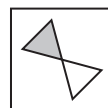
a



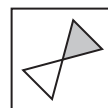
b




c



**d**



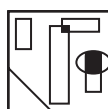
e



a



b



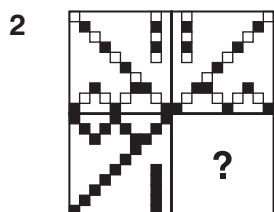
c



d



e



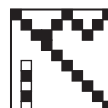
a



b



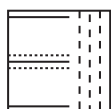
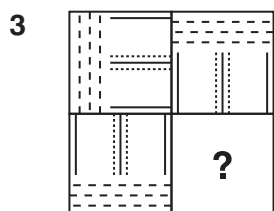
c



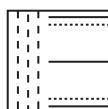
d



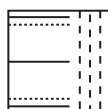
e



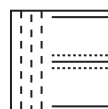
a



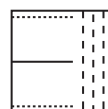
b



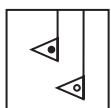
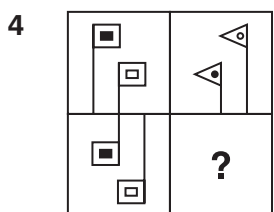
c



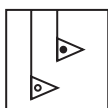
d



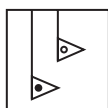
e



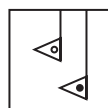
a



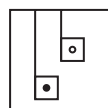
b



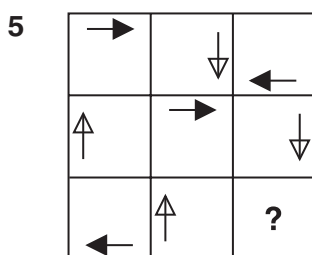
c



d



e



a



b



c

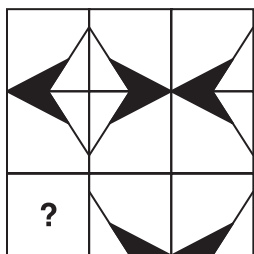


d



e

6



a



b



c



d

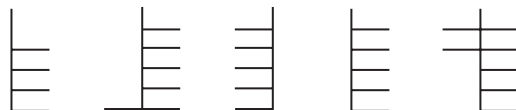
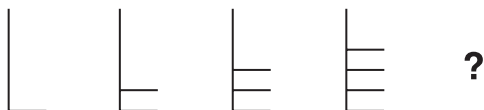


e



Which one comes next? Circle the letter.

Example



a

b

c

d

e

7



a

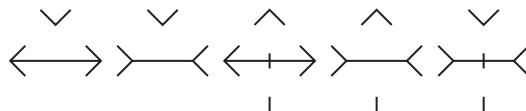
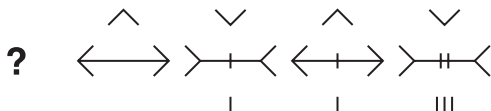
b

c

d

e

8



a

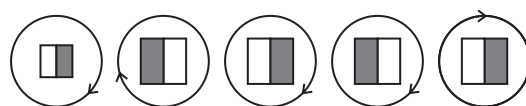
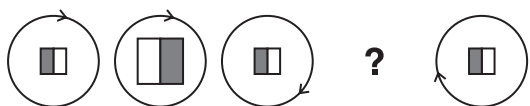
b

c

d

e

9



a

b

c

d

e

10



a

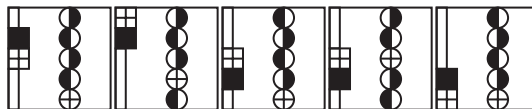
b

c

d

e

11



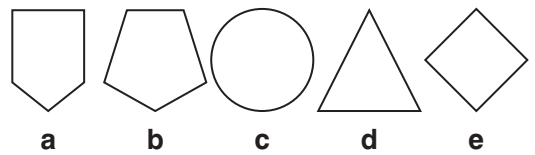
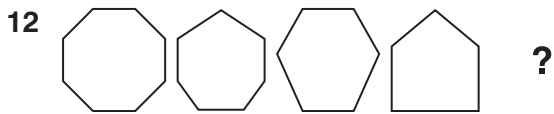
a

b

c

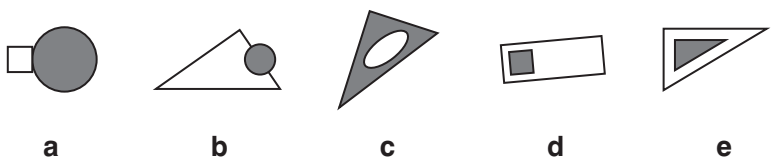
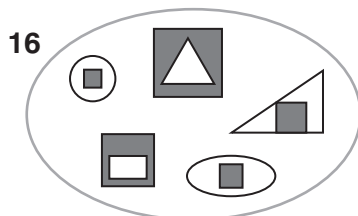
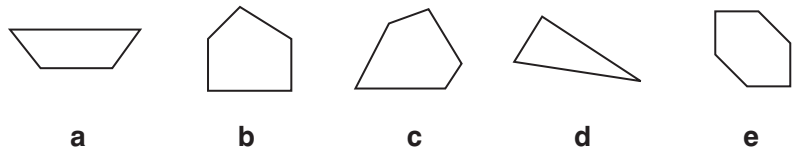
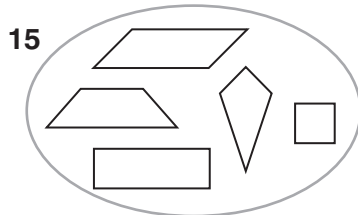
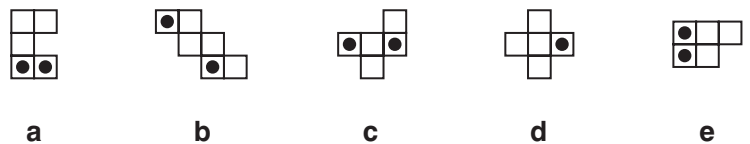
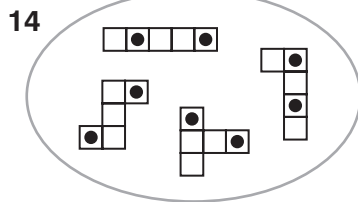
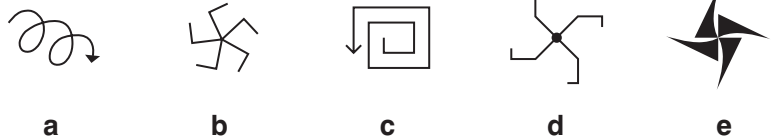
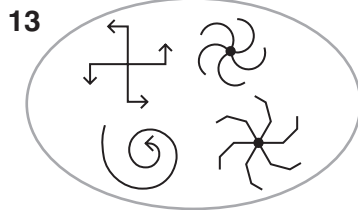
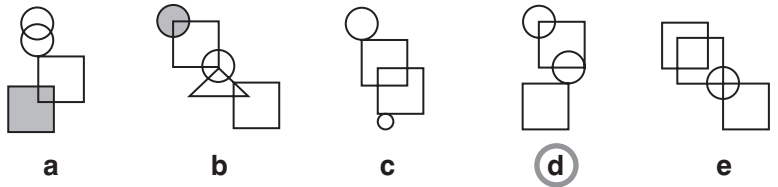
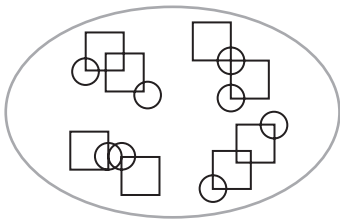
d

e

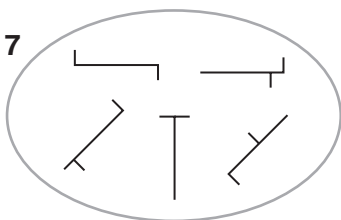


Which pattern on the right belongs in the group on the left? Circle the letter.

**Example**



17



a



b



c

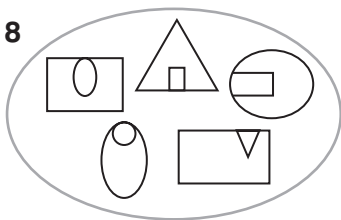


d



e

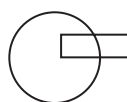
18



a



b



c



d



e

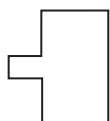


Which shape or pattern completes the second pair in the same way as the first pair?  
Circle the letter.


Example



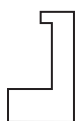
is to



as



is to



a



b



c



(d)



e

19



is to



as



is to



a



b



c



d



e

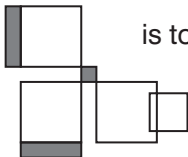
20



is to



as



is to



a



b



c

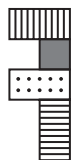


d



e

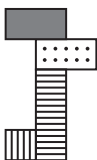
21



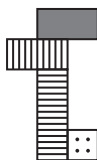
is to



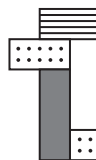
as



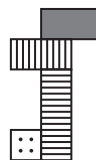
is to



a



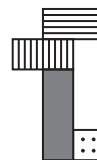
b



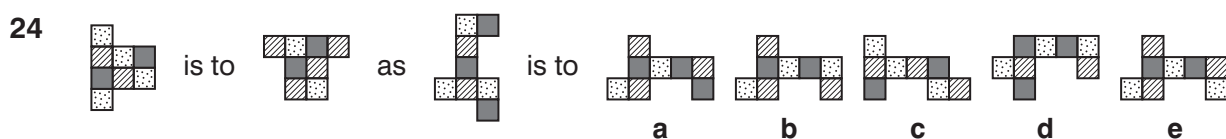
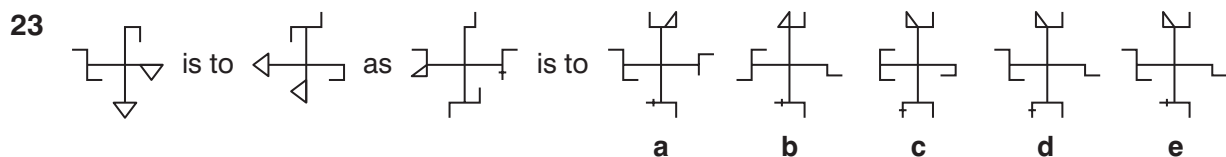
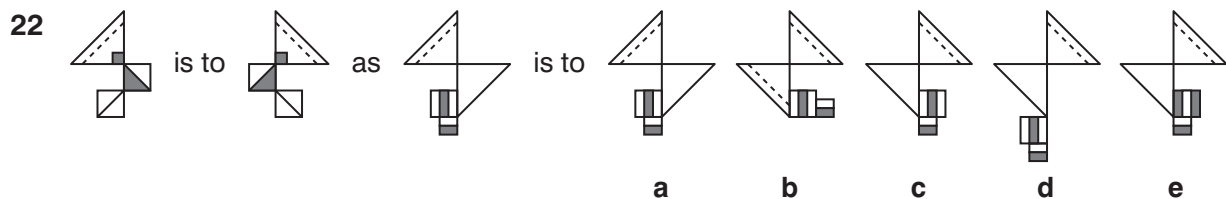
c



d

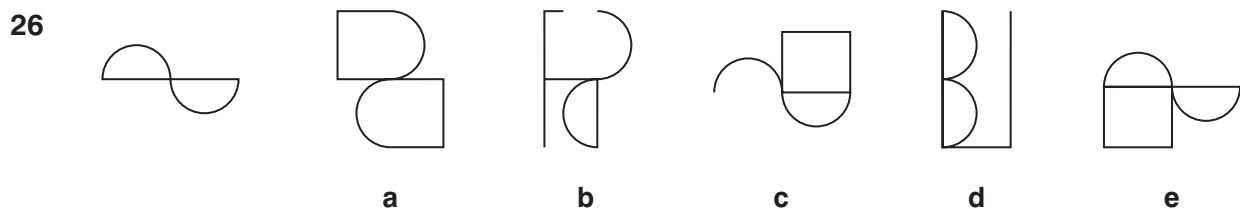
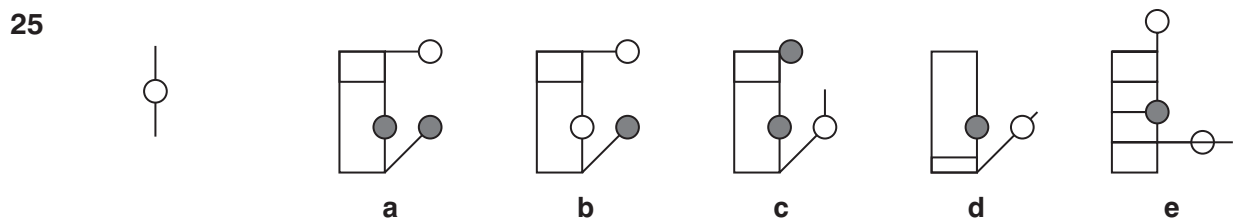
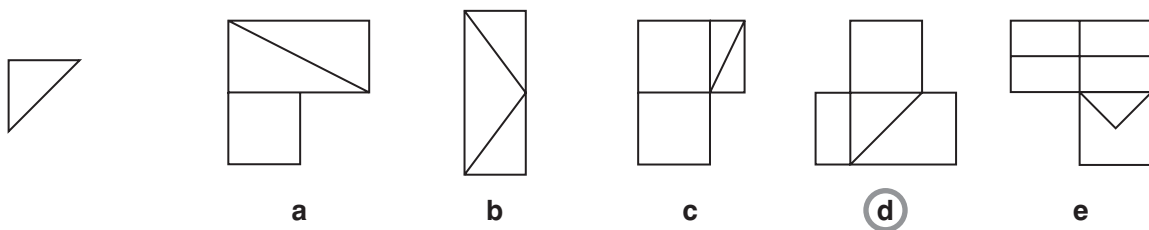


e



In which larger shape is the shape on the left hidden? Circle the letter.

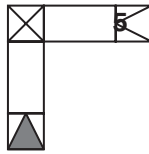
**Example**



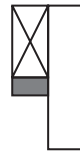
27



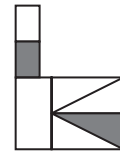
a



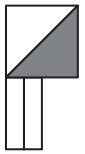
b



c



d



e



Which code matches the shape or pattern given at the end of each line? Circle the letter.

Example



AX



AY



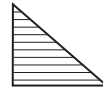
BZ



CY



BX



?

BZ

a

AZ

b

CX

c

BY

d

CZ

**e**

28




AX



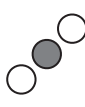
BY




CX



AZ



DY



?

DZ

a

AY

b

BX

c

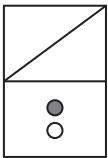
BZ

d

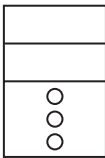
DX

e

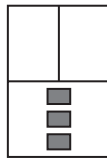
29



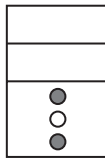
XG



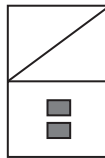
YH



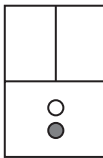
WI



XH



WG



?

YI

a

WH

b

WI

c

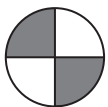
XI

d

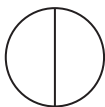
YG

e

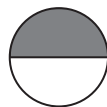
30



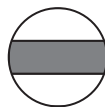
AZ



BY



BX



CX



CZ



?

CY

a

BY

b

AY

c

AX

d

BZ

e

Now go to the Progress Chart to record your score!

Total

30