

Maths Assessment-Reception

Name: _____ class: _____

Numbers

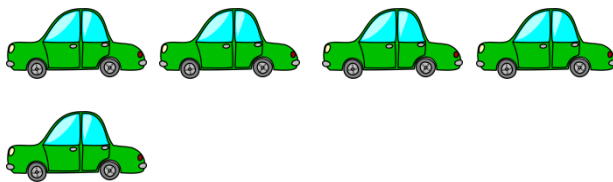
Name the following numbers

1	
2	
3	
4	

Marks: ____/4.

Counting

How many cars?



Marks: ____/1.

How many flowers?



Marks: ____/1.

Count the bees and circle the correct number of bees?



7

4



6

9

Marks: ____/1.

Maths Assessment-Reception

Which set has more apples?



Set

Marks: ____/1.

Which number is one more the following numbers?

7 _____ 9 _____ 2 _____


Marks: ____/3.

Which number is one less the following numbers?

6 _____ 4 _____ 10 _____


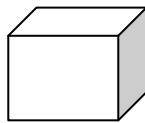
Marks: ____/3.

Circle the first tree and tick the last tree.



Marks: ____/2.

Draw a line to match the shape.



Cube

Rectangle

Triangle

Marks: ____/3.

Which aeroplane is shorter?



Marks: ____/1.